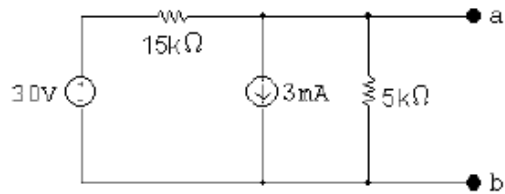
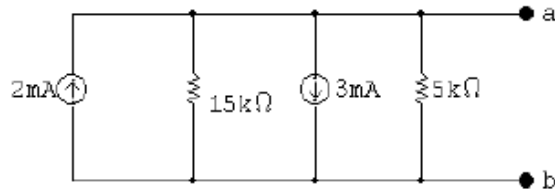


EENG 281 Homework #4 Solutions
Fall 2013

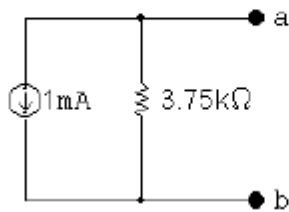
P 4.64 First we make the observation that the 10 mA current source and the $10\text{ k}\Omega$ resistor will have no influence on the behavior of the circuit with respect to the terminals a,b. This follows because they are in parallel with an ideal voltage source. Hence our circuit can be simplified to



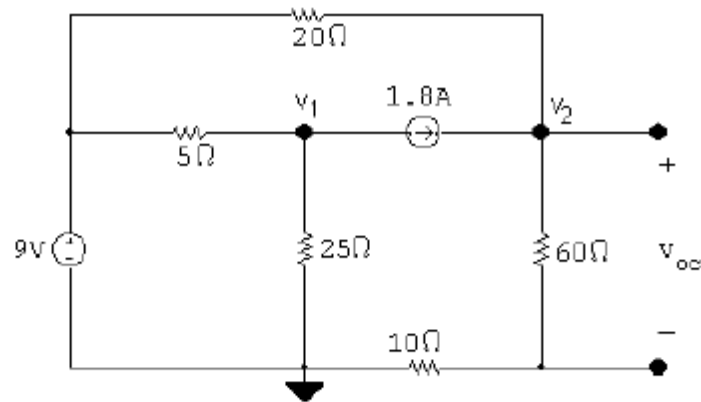
or



Therefore the Norton equivalent is



P 4.65 [a] Open circuit:

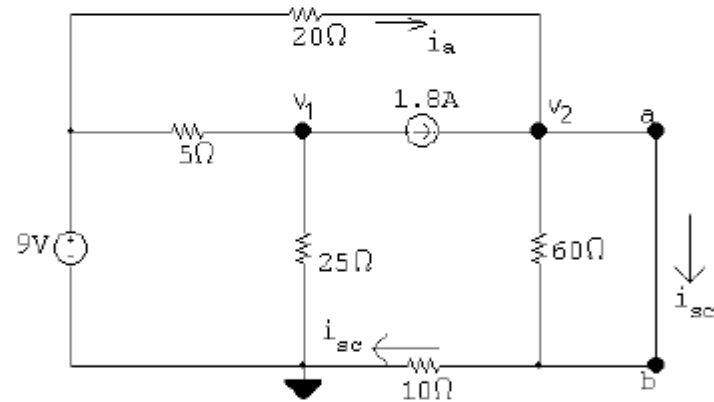


$$\frac{v_2 - 9}{20} + \frac{v_2}{70} - 1.8 = 0$$

$$v_2 = 35 \text{ V}$$

$$v_{\text{Th}} = \frac{60}{70}v_2 = 30 \text{ V}$$

Short circuit:



$$\frac{v_2 - 9}{20} + \frac{v_2}{10} - 1.8 = 0$$

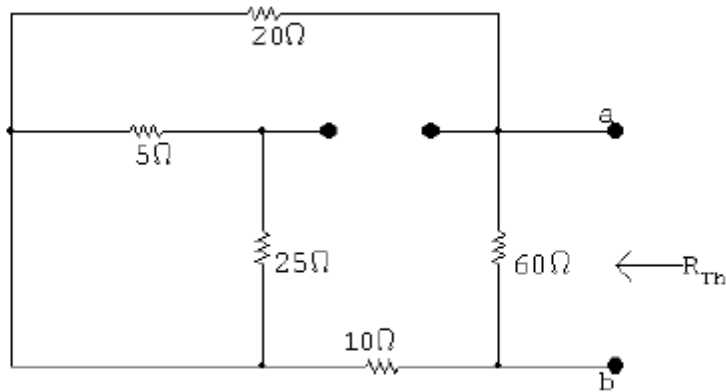
$$\therefore v_2 = 15 \text{ V}$$

$$i_a = \frac{9 - 15}{20} = -0.3 \text{ A}$$

$$i_{\text{sc}} = 1.8 - 0.3 = 1.5 \text{ A}$$

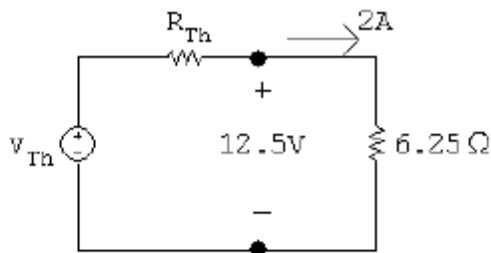
$$R_{\text{Th}} = \frac{30}{1.5} = 20 \Omega$$

[b]

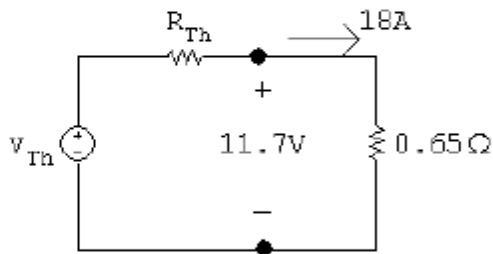


$$R_{Th} = (20 + 10 \parallel 60) = 20 \Omega \text{ (CHECKS)}$$

P 4.69



$$12.5 = v_{Th} - 2R_{Th}$$



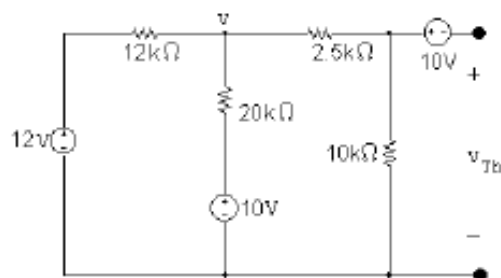
$$11.7 = v_{Th} - 18R_{Th}$$

Solving the above equations for V_{Th} and R_{Th} yields

$$v_{Th} = 12.6 \text{ V}, \quad R_{Th} = 50 \text{ m}\Omega$$

$$\therefore I_N = 252 \text{ A}, \quad R_N = 50 \text{ m}\Omega$$

P 4.79 [a]

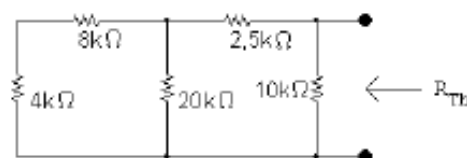


$$\frac{v - 12}{12,000} + \frac{v - 10}{20,000} + \frac{v}{12,500} = 0$$

Solving, $v = 7.03125 \text{ V}$

$$v_{10k} = \frac{10,000}{12,500}(7.03125) = 5.625 \text{ V}$$

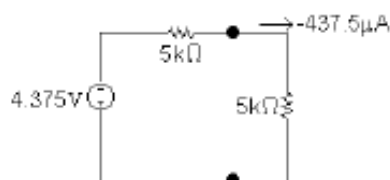
$$\therefore V_{Th} = v - 10 = -4.375 \text{ V}$$



$$R_{Th} = [(12,000 \parallel 20,000) + 2500] = 5 \text{ k}\Omega$$

$$R_o = R_{Th} = 5 \text{ k}\Omega$$

[b]



$$p_{max} = (-437.5 \times 10^{-6})^2(5000) = 957 \mu\text{W}$$

[c] The resistor closest to 5 kΩ from Appendix H has a value of 4.7 kΩ. Use voltage division to find the voltage drop across this load resistor, and use the voltage to find the power delivered to it:

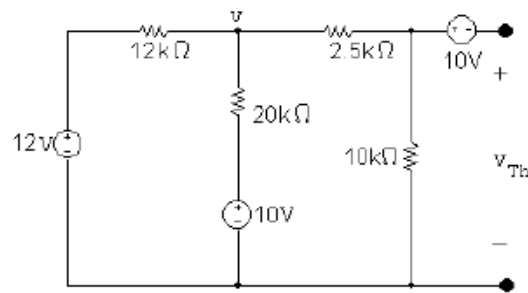
$$v_{4.7k} = \frac{4700}{4700 + 5000}(-4.375) = -2.12 \text{ V}$$

$$p_{4.7k} = \frac{(-2.12)^2}{4700} = 956.12 \mu\text{W}$$

The percent error between the maximum power and the power delivered to the best resistor from Appendix H is

$$\% \text{ error} = \left(\frac{956}{957} - 1 \right) (100) = -0.1\%$$

P 4.79 [a]

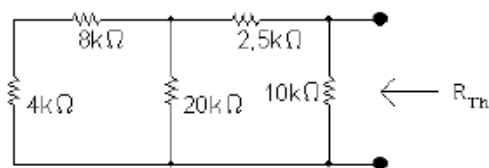


$$\frac{v - 12}{12,000} + \frac{v - 10}{20,000} + \frac{v}{12,500} = 0$$

Solving, $v = 7.03125 \text{ V}$

$$v_{10k} = \frac{10,000}{12,500}(7.03125) = 5.625 \text{ V}$$

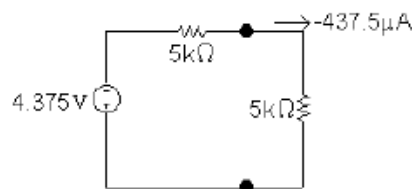
$$\therefore V_{Th} = v - 10 = -4.375 \text{ V}$$



$$R_{Th} = [(12,000 \parallel 20,000) + 2500] = 5 \text{ k}\Omega$$

$$R_o = R_{Th} = 5 \text{ k}\Omega$$

[b]



$$p_{\max} = (-437.5 \times 10^{-6})^2(5000) = 957 \mu\text{W}$$

[c] The resistor closest to 5 kΩ from Appendix H has a value of 4.7 kΩ. Use voltage division to find the voltage drop across this load resistor, and use the voltage to find the power delivered to it:

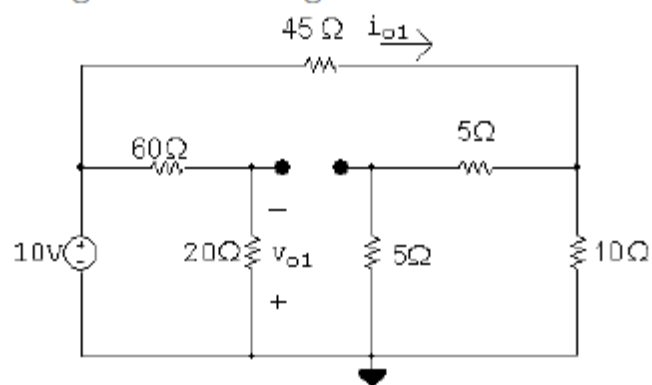
$$v_{4.7k} = \frac{4700}{4700 + 5000}(-4.375) = -2.12 \text{ V}$$

$$p_{4.7k} = \frac{(-2.12)^2}{4700} = 956.12 \mu\text{W}$$

The percent error between the maximum power and the power delivered to the best resistor from Appendix H is

$$\% \text{ error} = \left(\frac{956}{957} - 1 \right) (100) = -0.1\%$$

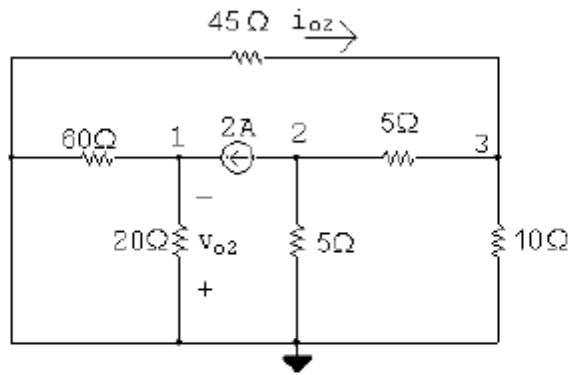
P 4.92 Voltage source acting alone:



$$i_{o1} = \frac{10}{45 + (5 + 5) \parallel 10} = \frac{10}{45 + 5} = 0.2 \text{ A}$$

$$v_{o1} = \frac{20}{20 + 60}(-10) = -2.5 \text{ V}$$

Current source acting alone:



$$\frac{v_2}{5} + 2 + \frac{v_2 - v_3}{5} = 0$$

$$\frac{v_3}{10} + \frac{v_3 - v_2}{5} + \frac{v_3}{45} = 0$$

Solving, $v_2 = -7.25 \text{ V} = v_{o2}$; $v_3 = -4.5 \text{ V}$

$$i_{o2} = -\frac{v_3}{45} = -0.1 \text{ A}$$

$$i_{20} = \frac{60 \parallel 20}{20} (2) = 1.5 \text{ A}$$

$$v_{o2} = -20i_{20} = -20(1.5) = -30 \text{ V}$$

$$\therefore v_o = v_{o1} + v_{o2} = -2.5 - 30 = -32.5 \text{ V}$$

$$i_o = i_{o1} + i_{o2} = 0.2 + 0.1 = 0.3 \text{ A}$$